

Mother of Christ Catholic School
2022 Summer Assignment

Entering

2nd

Grade



Expanded Form

Name _____

Complete the place-value.

1. $310 =$

3 hundreds 1 ten 0 ones

2. $529 =$

_____ hundreds _____ tens _____ ones

3. $608 =$

_____ hundreds _____ tens _____ ones

4. $679 =$

_____ hundreds _____ tens _____ ones

5. $840 =$

_____ hundreds _____ tens _____ ones

6. $334 =$

_____ hundreds _____ tens _____ ones

Add the place values.

7. $452 =$

$400 + 50 + 2$

8. $901 =$

9. $782 =$

10. $220 =$

11. $175 =$

12. $692 =$

13. Write the value of 2 in each number.

125 20 240 _____ 204 _____ 412 _____

14. Write the value of 9 in each number.

139 9 915 _____ 392 _____ 926 _____

15. Write the value of 1 in each number.

160 100 301 _____ 951 _____ 518 _____

Name _____

Hundreds Tens Ones

Complete.

1.

4 hundreds 6 tens 8 ones

7 hundreds 1 ten 9 ones

3 hundreds 5 tens 5 ones

2 hundreds 0 tens 6 ones

5 hundreds 4 tens 0 ones

8 hundreds 2 tens 2 ones

9 hundreds 3 tens 4 ones

hundreds	tens	ones	
4	6	8	= 468
			= _____
			= _____
			= _____
			= _____
			= _____
			= _____

Complete the place-value chart.

Then write the number and the number word.

2. 1 hundred 9 tens 3 ones

hundreds	tens	ones

_____ ninety-three

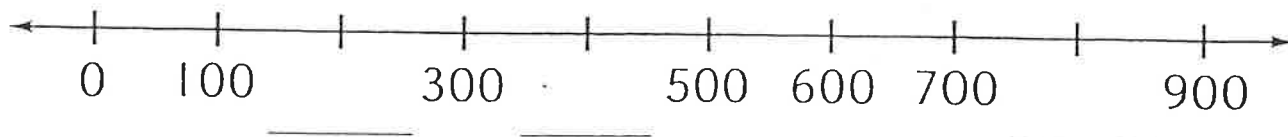
3. 7 hundreds 0 tens 4 ones

hundreds	tens	ones

_____ four

Write the missing numbers on the number line.

4.



Name _____

Ordering Numbers

Write the following numbers in order from least to greatest.

356, 563, 635

599, 799, 999, 899

155, 55, 78, 400

100, 0, 12, 987

245, 128, 720, 210

973, 812, 970, 109

Write the following numbers in order from greatest to least.

750, 770, 780, 790

621, 136, 216, 12

999, 993, 996, 995

710, 515, 715, 520

35, 70, 280, 140

690, 560, 960, 850

Which answer correctly identifies the following group of numbers from least to greatest?

356, 653, 536, 365

- ☐ A 365, 356, 536, 653
- ☐ B 653, 536, 365, 356
- ☐ C 356, 653, 365, 536
- ☐ D 356, 365, 536, 653

Which answer correctly identifies the following group of numbers from greatest to least?

989, 969, 999, 909

- ☐ A 909, 969, 989, 999
- ☐ B 909, 999, 969, 989
- ☐ C 999, 989, 969, 909
- ☐ D 999, 969, 989, 909

Comparing numbers up to 1000

Write down sign: $<$ (is less) or $=$ (is equal) or $>$ (is greater)

751

405

811

898

317

833

119

556

952

451

349

509

114

752

780

956

497

716

696

616

338

233

389

283

197

282

259

401

204

126

963

184

714

396

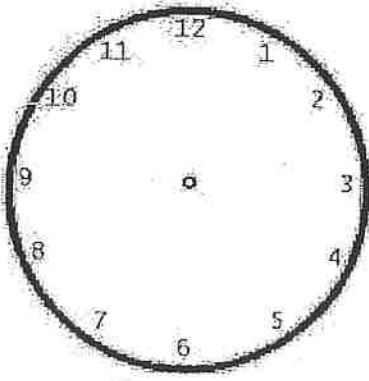
975

420

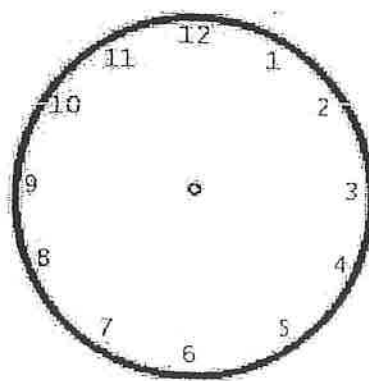
Name _____

Draw the Time

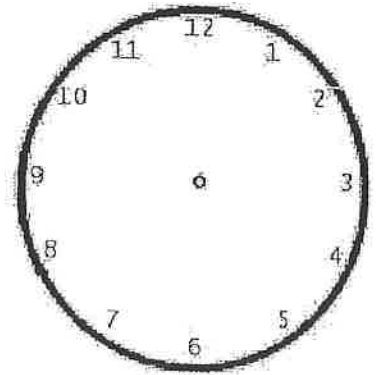
Draw hands on each clock face to reflect the proper time.



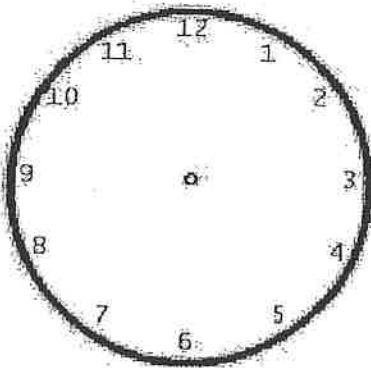
5:00



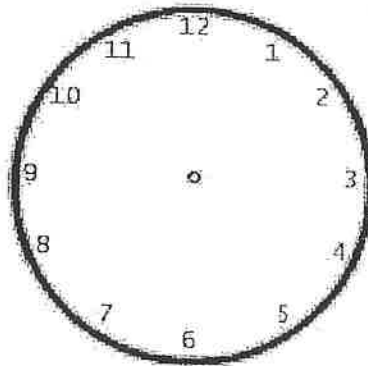
8:30



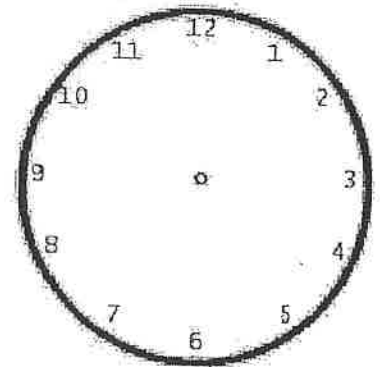
7:15



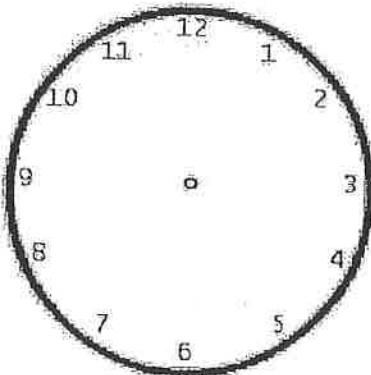
11:30



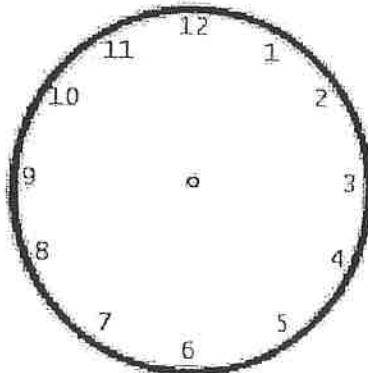
6:00



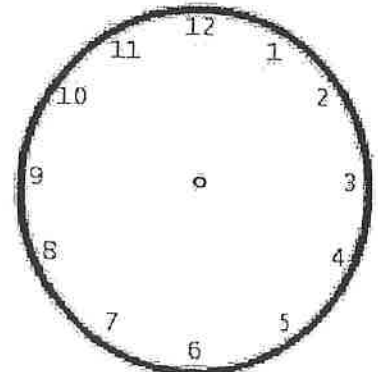
3:45



12:00




9:15



2:30

Name _____



519 _____

324 _____

976 _____

885 _____

377 _____

732 _____

416 _____

166 _____

690 _____

898 _____

411 _____

188 _____

560 _____

991 _____

787 _____

404 _____

852 _____

224 _____

378 _____

527 _____

607 _____

553 _____

788 _____

252 _____

812 _____

646 _____

141 _____

207 _____

874 _____

337 _____

750 _____

302 _____

407 _____

386 _____

105 _____

988 _____

291 _____

161 _____

Name _____

Three Digit Subtraction Worksheet

Find the answer.

A	$\begin{array}{r} 622 \\ - 430 \\ \hline \end{array}$	$\begin{array}{r} 332 \\ - 171 \\ \hline \end{array}$	$\begin{array}{r} 222 \\ - 129 \\ \hline \end{array}$	$\begin{array}{r} 444 \\ - 367 \\ \hline \end{array}$	$\begin{array}{r} 230 \\ - 124 \\ \hline \end{array}$
---	---	---	---	---	---

B	$\begin{array}{r} 377 \\ - 194 \\ \hline \end{array}$	$\begin{array}{r} 401 \\ - 112 \\ \hline \end{array}$	$\begin{array}{r} 704 \\ - 423 \\ \hline \end{array}$	$\begin{array}{r} 831 \\ - 432 \\ \hline \end{array}$	$\begin{array}{r} 544 \\ - 482 \\ \hline \end{array}$
---	---	---	---	---	---

C	$\begin{array}{r} 427 \\ - 371 \\ \hline \end{array}$	$\begin{array}{r} 722 \\ - 626 \\ \hline \end{array}$	$\begin{array}{r} 330 \\ - 298 \\ \hline \end{array}$	$\begin{array}{r} 804 \\ - 209 \\ \hline \end{array}$	$\begin{array}{r} 274 \\ - 147 \\ \hline \end{array}$
---	---	---	---	---	---

D	$\begin{array}{r} 423 \\ - 128 \\ \hline \end{array}$	$\begin{array}{r} 643 \\ - 275 \\ \hline \end{array}$	$\begin{array}{r} 242 \\ - 193 \\ \hline \end{array}$	$\begin{array}{r} 423 \\ - 281 \\ \hline \end{array}$	$\begin{array}{r} 277 \\ - 179 \\ \hline \end{array}$
---	---	---	---	---	---

E	$\begin{array}{r} 474 \\ - 192 \\ \hline \end{array}$	$\begin{array}{r} 401 \\ - 321 \\ \hline \end{array}$	$\begin{array}{r} 420 \\ - 291 \\ \hline \end{array}$	$\begin{array}{r} 404 \\ - 123 \\ \hline \end{array}$	$\begin{array}{r} 823 \\ - 591 \\ \hline \end{array}$
---	---	---	---	---	---

F	$\begin{array}{r} 317 \\ - 185 \\ \hline \end{array}$	$\begin{array}{r} 440 \\ - 361 \\ \hline \end{array}$	$\begin{array}{r} 211 \\ - 140 \\ \hline \end{array}$	$\begin{array}{r} 440 \\ - 263 \\ \hline \end{array}$	$\begin{array}{r} 447 \\ - 174 \\ \hline \end{array}$
---	---	---	---	---	---

Name _____

Math Addition Practice

1.

$$\begin{array}{r} 17 \\ 67 \\ + 82 \\ \hline \end{array}$$



2.

$$\begin{array}{r} 34 \\ 99 \\ + 87 \\ \hline \end{array}$$

3.

$$\begin{array}{r} 25 \\ 85 \\ + 68 \\ \hline \end{array}$$

4.

$$\begin{array}{r} 56 \\ 80 \\ + 15 \\ \hline \end{array}$$

5.

$$\begin{array}{r} 26 \\ 43 \\ + 49 \\ \hline \end{array}$$

6.

$$\begin{array}{r} 61 \\ 29 \\ + 92 \\ \hline \end{array}$$

7.

$$\begin{array}{r} 33 \\ 94 \\ + 76 \\ \hline \end{array}$$

8.

$$\begin{array}{r} 81 \\ 55 \\ + 19 \\ \hline \end{array}$$

9.

$$\begin{array}{r} 38 \\ 70 \\ + 13 \\ \hline \end{array}$$

10.

$$\begin{array}{r} 45 \\ 74 \\ + 12 \\ \hline \end{array}$$

11.

$$\begin{array}{r} 51 \\ 69 \\ + 10 \\ \hline \end{array}$$

12.

$$\begin{array}{r} 77 \\ 50 \\ + 65 \\ \hline \end{array}$$

13.

$$\begin{array}{r} 31 \\ 98 \\ + 73 \\ \hline \end{array}$$

14.

$$\begin{array}{r} 37 \\ 10 \\ + 64 \\ \hline \end{array}$$

15.

$$\begin{array}{r} 22 \\ 60 \\ + 48 \\ \hline \end{array}$$



Name _____


Add or Subtract

Find the sum or the difference.

$$\begin{array}{r} 6 \\ + 4 \\ \hline \end{array}$$

$$\begin{array}{r} 15 \\ - 8 \\ \hline \end{array}$$

$$\begin{array}{r} 106 \\ + 612 \\ \hline \end{array}$$



$$\begin{array}{r} 750 \\ - 300 \\ \hline \end{array}$$

$$\begin{array}{r} 862 \\ + 24 \\ \hline \end{array}$$

$$\begin{array}{r} 547 \\ + 132 \\ \hline \end{array}$$

$$\begin{array}{r} 185 \\ - 113 \\ \hline \end{array}$$

$$\begin{array}{r} 333 \\ - 11 \\ \hline \end{array}$$

$$\begin{array}{r} 70 \\ + 13 \\ \hline \end{array}$$

$$\begin{array}{r} 87 \\ + 11 \\ \hline \end{array}$$

$$\begin{array}{r} 687 \\ - 42 \\ \hline \end{array}$$

$$\begin{array}{r} 26 \\ + 13 \\ \hline \end{array}$$

$$\begin{array}{r} 741 \\ - 221 \\ \hline \end{array}$$

$$\begin{array}{r} 50 \\ + 50 \\ \hline \end{array}$$

$$\begin{array}{r} 719 \\ - 205 \\ \hline \end{array}$$

$$\begin{array}{r} 126 \\ + 372 \\ \hline \end{array}$$

$$\begin{array}{r} 23 \\ + 96 \\ \hline \end{array}$$

$$\begin{array}{r} 32 \\ + 54 \\ \hline \end{array}$$

$$\begin{array}{r} 380 \\ - 270 \\ \hline \end{array}$$

$$\begin{array}{r} 245 \\ + 413 \\ \hline \end{array}$$

$$\begin{array}{r} 559 \\ - 248 \\ \hline \end{array}$$

$$\begin{array}{r} 148 \\ + 231 \\ \hline \end{array}$$

$$\begin{array}{r} 928 \\ - 316 \\ \hline \end{array}$$

$$\begin{array}{r} 612 \\ + 321 \\ \hline \end{array}$$

$$\begin{array}{r} 513 \\ - 100 \\ \hline \end{array}$$

$$\begin{array}{r} 130 \\ + 37 \\ \hline \end{array}$$

$$\begin{array}{r} 931 \\ - 200 \\ \hline \end{array}$$


$$\begin{array}{r} 27 \\ + 82 \\ \hline \end{array}$$

Name _____


Pot of Gold Addition

Solve each addition problem and write the sum on the pot of gold.


$$\begin{array}{r} \$3.49 \\ + \$1.00 \\ \hline \end{array}$$




$$\begin{array}{r} \$2.23 \\ + \$4.41 \\ \hline \end{array}$$



$$\begin{array}{r} \$1.38 \\ + \$2.10 \\ \hline \end{array}$$



$$\begin{array}{r} \$3.01 \\ + \$5.90 \\ \hline \end{array}$$




$$\begin{array}{r} \$6.71 \\ + \$2.18 \\ \hline \end{array}$$




$$\begin{array}{r} \$5.26 \\ + \$2.32 \\ \hline \end{array}$$




$$\begin{array}{r} \$7.25 \\ + \$1.42 \\ \hline \end{array}$$




$$\begin{array}{r} \$3.27 \\ + \$6.02 \\ \hline \end{array}$$




$$\begin{array}{r} \$3.45 \\ + \$5.41 \\ \hline \end{array}$$



$$\begin{array}{r} \$8.07 \\ + \$1.42 \\ \hline \end{array}$$




$$\begin{array}{r} \$9.31 \\ + \$.40 \\ \hline \end{array}$$



$$\begin{array}{r} \$1.78 \\ + \$4.21 \\ \hline \end{array}$$




$$\begin{array}{r} \$5.63 \\ + \$2.24 \\ \hline \end{array}$$




$$\begin{array}{r} \$1.82 \\ + \$4.17 \\ \hline \end{array}$$



$$\begin{array}{r} \$6.24 \\ + \$2.35 \\ \hline \end{array}$$



$$\begin{array}{r} \$7.14 \\ + \$2.85 \\ \hline \end{array}$$



Name: _____

Identifying and Adding Coins

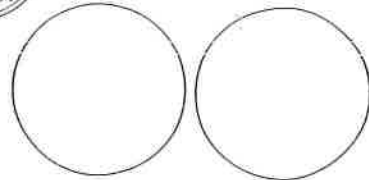
1. Circle the name of this coin.

penny nickel dime quarter



2. What is the value of this coin? _____

3. Which two coins could you trade for this coin?
Write the amounts in the circles.



4. Circle the name of this coin.

penny nickel dime quarter



5. What is the value of this coin? _____

6. Which coins could you trade for this coin?
Draw circles with the coin amounts written inside.

7. What is the total value of these coins? Show how you could count up to add them. Use skip counting skills.



8. Circle the name of this coin.

penny nickel dime quarter



5. What is the value of this coin? _____

6. Draw 3 coins you could trade for this coin.

7. What is the total value of these coins? Show how you could count up to add them. Use skip counting skills.





Secret Multiplication Word Puzzle

Spring - Twos

Name: _____

Date: _____

INSTRUCTIONS: Multiply each number. Then match the answer to the letter in the Secret Message alphabet key. Write the letter on the blank above the problem number.

$$\begin{array}{r} 1 \quad \quad 4 \\ \times \quad 2 \\ \hline \end{array}$$

$$\begin{array}{r} 2 \quad \quad 6 \\ \times \quad 2 \\ \hline \end{array}$$

$$\begin{array}{r} 3 \quad \quad 9 \\ \times \quad 2 \\ \hline \end{array}$$

$$\begin{array}{r} 4 \quad \quad 2 \\ \times \quad 2 \\ \hline \end{array}$$

$$\begin{array}{r} 5 \quad \quad 2 \\ \times \quad 1 \\ \hline \end{array}$$

$$\begin{array}{r} 6 \quad \quad 2 \\ \times \quad 2 \\ \hline \end{array}$$

$$\begin{array}{r} 7 \quad \quad 2 \\ \times \quad 6 \\ \hline \end{array}$$

$$\begin{array}{r} 8 \quad \quad 5 \\ \times \quad 2 \\ \hline \end{array}$$

$$\begin{array}{r} 9 \quad \quad 2 \\ \times \quad 3 \\ \hline \end{array}$$

$$\begin{array}{r} 10 \quad \quad 2 \\ \times \quad 0 \\ \hline \end{array}$$

$$\begin{array}{r} 11 \quad \quad 2 \\ \times \quad 5 \\ \hline \end{array}$$

$$\begin{array}{r} 12 \quad \quad 3 \\ \times \quad 2 \\ \hline \end{array}$$

$$\begin{array}{r} 13 \quad \quad 0 \\ \times \quad 2 \\ \hline \end{array}$$

$$\begin{array}{r} 14 \quad \quad 2 \\ \times \quad 9 \\ \hline \end{array}$$

$$\begin{array}{r} 15 \quad \quad 1 \\ \times \quad 2 \\ \hline \end{array}$$

$$\begin{array}{r} 16 \quad \quad 7 \\ \times \quad 2 \\ \hline \end{array}$$

$$\begin{array}{r} 17 \quad \quad 8 \\ \times \quad 2 \\ \hline \end{array}$$

$$\begin{array}{r} 18 \quad \quad 2 \\ \times \quad 4 \\ \hline \end{array}$$

$$\begin{array}{r} 19 \quad \quad 2 \\ \times \quad 7 \\ \hline \end{array}$$

$$\begin{array}{r} 20 \quad \quad 2 \\ \times \quad 8 \\ \hline \end{array}$$

_____ 19 _____ 8 _____ 6 _____ 17

_____ 19 _____ 1 _____ 18

Secret Message Alphabet Key

A= 9	B= 14	C= 49	D= 72	E= 8	F= 32	G= 24	H= 20	I= 28	J= 64	K= 27	L= 81	M= 56
N= 45	O= 48	P= 21	Q= 30	R= 36	S= 4	T= 7	U= 10	V= 35	W= 15	X= 54	Y= 16	Z= 63



Secret Multiplication Word Puzzle

Spring - Threes

Name: _____

Date: _____

INSTRUCTIONS: Multiply each number. Then match the answer to the letter in the Secret Message alphabet key. Write the letter on the blank above the problem number.

$$\begin{array}{r} 1 \quad 3 \\ \times 8 \\ \hline \end{array}$$

$$\begin{array}{r} 2 \quad 1 \\ \times 3 \\ \hline \end{array}$$

$$\begin{array}{r} 3 \quad 3 \\ \times 0 \\ \hline \end{array}$$

$$\begin{array}{r} 4 \quad 7 \\ \times 3 \\ \hline \end{array}$$

$$\begin{array}{r} 5 \quad 3 \\ \times 3 \\ \hline \end{array}$$

$$\begin{array}{r} 6 \quad 5 \\ \times 3 \\ \hline \end{array}$$

$$\begin{array}{r} 7 \quad 3 \\ \times 7 \\ \hline \end{array}$$

$$\begin{array}{r} 8 \quad 0 \\ \times 3 \\ \hline \end{array}$$

$$\begin{array}{r} 9 \quad 9 \\ \times 3 \\ \hline \end{array}$$

$$\begin{array}{r} 10 \quad 8 \\ \times 3 \\ \hline \end{array}$$

$$\begin{array}{r} 11 \quad 3 \\ \times 2 \\ \hline \end{array}$$

$$\begin{array}{r} 12 \quad 3 \\ \times 4 \\ \hline \end{array}$$

$$\begin{array}{r} 13 \quad 6 \\ \times 3 \\ \hline \end{array}$$

$$\begin{array}{r} 14 \quad 3 \\ \times 3 \\ \hline \end{array}$$

$$\begin{array}{r} 15 \quad 3 \\ \times 1 \\ \hline \end{array}$$

$$\begin{array}{r} 16 \quad 4 \\ \times 3 \\ \hline \end{array}$$

$$\begin{array}{r} 17 \quad 2 \\ \times 3 \\ \hline \end{array}$$

$$\begin{array}{r} 18 \quad 3 \\ \times 5 \\ \hline \end{array}$$

$$\begin{array}{r} 19 \quad 3 \\ \times 6 \\ \hline \end{array}$$

$$\begin{array}{r} 20 \quad 3 \\ \times 9 \\ \hline \end{array}$$

14 3 20 9 17 12

10 2

Secret Message Alphabet Key

A= 0	B= 9	C= 48	D= 45	E= 6	F= 32	G= 14	H= 4	I= 42	J= 25	K= 40	L= 36	M= 28
N= 16	O= 72	P= 3	Q= 35	R= 12	S= 7	T= 27	U= 24	V= 54	W= 49	X= 5	Y= 63	Z= 81



Secret Multiplication Word Puzzle

Spring - Fours

Name: _____

Date: _____

INSTRUCTIONS: Multiply each number. Then match the answer to the letter in the Secret Message alphabet key. Write the letter on the blank above the problem number.

$$\begin{array}{r} 1 \quad \quad 4 \\ \times \quad 6 \\ \hline \end{array}$$

$$\begin{array}{r} 2 \quad \quad 4 \\ \times \quad 1 \\ \hline \end{array}$$

$$\begin{array}{r} 3 \quad \quad 4 \\ \times \quad 0 \\ \hline \end{array}$$

$$\begin{array}{r} 4 \quad \quad 4 \\ \times \quad 4 \\ \hline \end{array}$$

$$\begin{array}{r} 5 \quad \quad 4 \\ \times \quad 8 \\ \hline \end{array}$$

$$\begin{array}{r} 6 \quad \quad 4 \\ \times \quad 7 \\ \hline \end{array}$$

$$\begin{array}{r} 7 \quad \quad 8 \\ \times \quad 4 \\ \hline \end{array}$$

$$\begin{array}{r} 8 \quad \quad 4 \\ \times \quad 3 \\ \hline \end{array}$$

$$\begin{array}{r} 9 \quad \quad 4 \\ \times \quad 4 \\ \hline \end{array}$$

$$\begin{array}{r} 10 \quad \quad 0 \\ \times \quad 4 \\ \hline \end{array}$$

$$\begin{array}{r} 11 \quad \quad 4 \\ \times \quad 2 \\ \hline \end{array}$$

$$\begin{array}{r} 12 \quad \quad 4 \\ \times \quad 5 \\ \hline \end{array}$$

$$\begin{array}{r} 13 \quad \quad 6 \\ \times \quad 4 \\ \hline \end{array}$$

$$\begin{array}{r} 14 \quad \quad 9 \\ \times \quad 4 \\ \hline \end{array}$$

$$\begin{array}{r} 15 \quad \quad 4 \\ \times \quad 9 \\ \hline \end{array}$$

$$\begin{array}{r} 16 \quad \quad 7 \\ \times \quad 4 \\ \hline \end{array}$$

$$\begin{array}{r} 17 \quad \quad 1 \\ \times \quad 4 \\ \hline \end{array}$$

$$\begin{array}{r} 18 \quad \quad 5 \\ \times \quad 4 \\ \hline \end{array}$$

$$\begin{array}{r} 19 \quad \quad 2 \\ \times \quad 4 \\ \hline \end{array}$$

$$\begin{array}{r} 20 \quad \quad 3 \\ \times \quad 4 \\ \hline \end{array}$$

____ 11 ____ 7 ____ 12 ____ 18 ____ 4 ____ 16

____ 1 ____ 7 ____ 14 ____ 19 ____ 3 ____ 17 ____ 8

Secret Message Alphabet Key

A= 9	B= 63	C= 14	D= 20	E= 28	F= 49	G= 12	H= 18	I= 0	J= 24	K= 10	L= 16	M= 36
N= 4	O= 21	P= 8	Q= 3	R= 42	S= 7	T= 54	U= 32	V= 56	W= 64	X= 81	Y= 6	Z= 48



Secret Multiplication Word Puzzle

Spring - Fives

Name: _____
Date: _____

INSTRUCTIONS: Multiply each number. Then match the answer to the letter in the Secret Message alphabet key. Write the letter on the blank above the problem number.

$$\begin{array}{r} 1 \quad 6 \\ \times 5 \\ \hline \end{array}$$

$$\begin{array}{r} 2 \quad 1 \\ \times 5 \\ \hline \end{array}$$

$$\begin{array}{r} 3 \quad 5 \\ \times 3 \\ \hline \end{array}$$

$$\begin{array}{r} 4 \quad 5 \\ \times 9 \\ \hline \end{array}$$

$$\begin{array}{r} 5 \quad 5 \\ \times 4 \\ \hline \end{array}$$

$$\begin{array}{r} 6 \quad 5 \\ \times 1 \\ \hline \end{array}$$

$$\begin{array}{r} 7 \quad 5 \\ \times 5 \\ \hline \end{array}$$

$$\begin{array}{r} 8 \quad 4 \\ \times 5 \\ \hline \end{array}$$

$$\begin{array}{r} 9 \quad 5 \\ \times 5 \\ \hline \end{array}$$

$$\begin{array}{r} 10 \quad 5 \\ \times 0 \\ \hline \end{array}$$

$$\begin{array}{r} 11 \quad 5 \\ \times 6 \\ \hline \end{array}$$

$$\begin{array}{r} 12 \quad 3 \\ \times 5 \\ \hline \end{array}$$

$$\begin{array}{r} 13 \quad 5 \\ \times 8 \\ \hline \end{array}$$

$$\begin{array}{r} 14 \quad 9 \\ \times 5 \\ \hline \end{array}$$

$$\begin{array}{r} 15 \quad 5 \\ \times 2 \\ \hline \end{array}$$

$$\begin{array}{r} 16 \quad 7 \\ \times 5 \\ \hline \end{array}$$

$$\begin{array}{r} 17 \quad 0 \\ \times 5 \\ \hline \end{array}$$

$$\begin{array}{r} 18 \quad 5 \\ \times 7 \\ \hline \end{array}$$

$$\begin{array}{r} 19 \quad 8 \\ \times 5 \\ \hline \end{array}$$

$$\begin{array}{r} 20 \quad 2 \\ \times 5 \\ \hline \end{array}$$

1 20 2 11 13 8

20 3 18 1 20 2 14 10

Secret Message Alphabet Key


A= 15	B= 72	C= 30	D= 24	E= 48	F= 21	G= 0	H= 10	I= 5	J= 56	K= 40	L= 9	M= 36
N= 45	O= 14	P= 64	Q= 7	R= 18	S= 20	T= 35	U= 28	V= 6	W= 3	X= 32	Y= 63	Z= 42

Name _____


Date _____

Fractions

Directions: Draw a line to match the picture to its fraction.



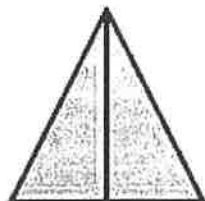
$$\frac{2}{3}$$




$$\frac{3}{4}$$



$$\frac{1}{2}$$

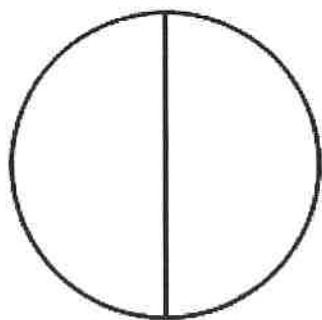


$$\frac{1}{4}$$




$$\frac{2}{2}$$

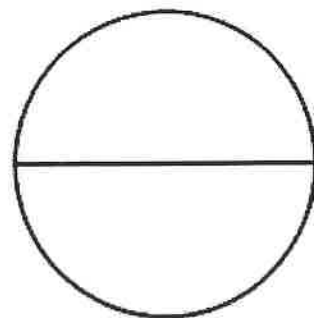
Shade the following shapes to show the given fraction.




$$\frac{1}{2}$$




$$\frac{1}{4}$$



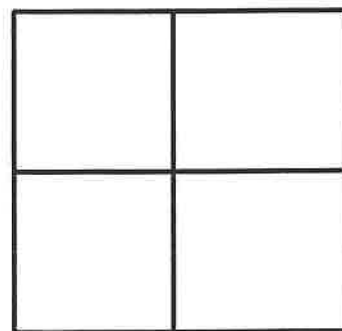
$$\frac{2}{2}$$



$$\frac{1}{3}$$




$$\frac{2}{4}$$

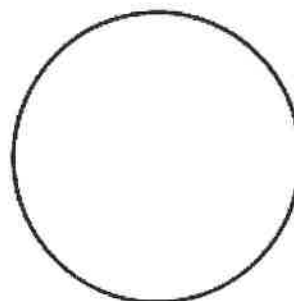


$$\frac{3}{4}$$

Partition and shade the shapes below to show the given fraction.



$$\frac{3}{4}$$



$$\frac{1}{2}$$

At the Zoo

Underline the nouns in each sentence.

A noun is a word that names a person, place, or thing.

The children ride a bus to the zoo.

A boy pets a starfish in the water.



A monkey eats a banana in the tree.

The penguin jumps into the pool.

My teacher likes the swans near the pond.



The girls feed the goats in the barn.

The class watches a show with dolphins.

A boy eats a sandwich on the bench.

A butterfly flies onto a leaf.



The shop has fun toys and clothes.

Name: _____

Date: _____

Verbs: A verb is an action word.

Color the verbs in the chart blue.

jump	desk	skip	yell	dog
pencil	run	boy	cup	draw
school	write	cat	play	house
eat	bug	dad	fly	ride
swim	pig	tent	cut	mom

Write the verbs from the chart on the lines.

1. _____

7. _____

2. _____

8. _____

3. _____

9. _____

4. _____

10. _____

5. _____

11. _____

6. _____

12. _____

Choose one verb to write in a complete sentence.


Contractions

A contraction is a way to make two words into one word.
Some letters will be left out, but an apostrophe will replace them.

Examples: have + not = haven't we + have = we've

Directions: Use the words from the box to answer the questions below.

aren't	haven't	can't	we've	weren't	you've	hasn't
--------	---------	-------	-------	---------	--------	--------



1. Write the correct contractions below.

we + have = _____ have + not = _____

are + not = _____ you + have = _____

has + not = _____ were + not = _____

can + not = _____

2. Rewrite the sentences below using contractions from the box.

They have not been on the computer.

We were not ready for the train ride!

Most students are not here.

Punctuation: In the Garden

Every statement ends with a period. Every question ends with a question mark. Add a period or question mark to the end of each sentence.



Do you see the worms ____

I like growing carrots ____

An apple fell from a tree ____

Is the sun out ____


The flowers are pink ____

A bird dropped a seed ____

Where is the shovel ____

Today is a nice day ____

Planting a garden is fun ____

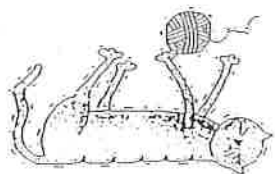



Name: _____

Missing Capital Letters

Directions: Read the sentences below. Some of the words need capital letters, but they are missing. Think about what words need capital letters, and write them where they belong. {Words that need capital letters: first word in a sentence, names, holidays, special places, days of the week, months, and I.}

1. my friend patty and her mom went to mcqueen's pet store and bought a new kitten.
2. patty named her new pet fluffy.
3. patty's mom, judy, gave fluffy a blue pillow to sleep on.
4. next saturday will be valentine's day.
5. patty made a special heart-shaped card for fluffy
6. fluffy plays very well with patty's dog, pugsy.
7. i think patty will take good care of fluffy.





Capitals

Circle the words in each sentence that need a capital letter. Write them on the lines.

1. when will mike and susan go to the park?

2. they live in london, england.

3. the dogs' names are duffy and max.

4. there are many countries in south america.

5. the name of the park is central park.

The Bike Ride


The day was sunny and warm. It was perfect for riding bikes. "How about a bike ride, Dad?" I asked. "It will be our first one this year. We could ride to the **creek** and back. All the trees are in bloom. It will be a pretty ride!"

Dad looked at me. "That's a long uphill ride on the way home. It might be too hard for you."

"No, I'm in great shape," I said. I put on my helmet. Then I began to pedal up and down the driveway. Soon I was huffing and puffing. "Maybe I'm not in such good shape after all!" I said.

Dad laughed. "The problem is not you," he said. "Your tires are almost flat."

So, Dad and I went out to the garage. He took his air pump off the wall. "This will do the trick," he said.



Name _____ Date _____

Use what you read in the passage to answer the questions.

1. Who are the characters in the story?


2. Why does Dad think the ride home might be hard?

3. Why does Jada have a hard time riding her bike?

4. What does "huffing and puffing" mean?

5. What is a **creek** in the story?

6. What kind of weather is in the story?



The Story of Yen

Yen did all of the **chores**. Her stepmother gave her one bowl of rice a day. One day, Yen took her meal down to the fish pond. She started to cry. Her tears fell on the pond. A small goldfish swam to her. It opened its mouth.



"I see that you are starving, too," said Yen. She gave the goldfish some of her rice.

Yen visited the goldfish every day. One day, her stepmother saw Yen talking to the fish. That night her stepmother said, "You work hard. I've cooked you supper." The goldfish was on the dish.

Yen buried her friend. She dreamed about the fish. It told her that it had "wishing bones."

The king had a party. Yen was not allowed to go. She dug up the bones and made a wish. The bones became a lovely dress and golden slippers. Yen went to the party. She saw the king, and it was love at first sight! Yen and the king were married. Her stepmother wasn't allowed to visit.

Name _____ Date _____

Use what you read in the passage to answer the questions.

1. What are **chores** in the tale?

2. Why does Yen share her rice with the goldfish?

3. What happened to the goldfish?

4. What story do you know that is like this one?

5. What is similar about this story and the one you know? What is different?

6. What message is the author trying to give the reader?
